




PAKISTAN EXCEL ENGLISH SCHOOL

MATh Final Term Revision sheet Grade (1) 2024



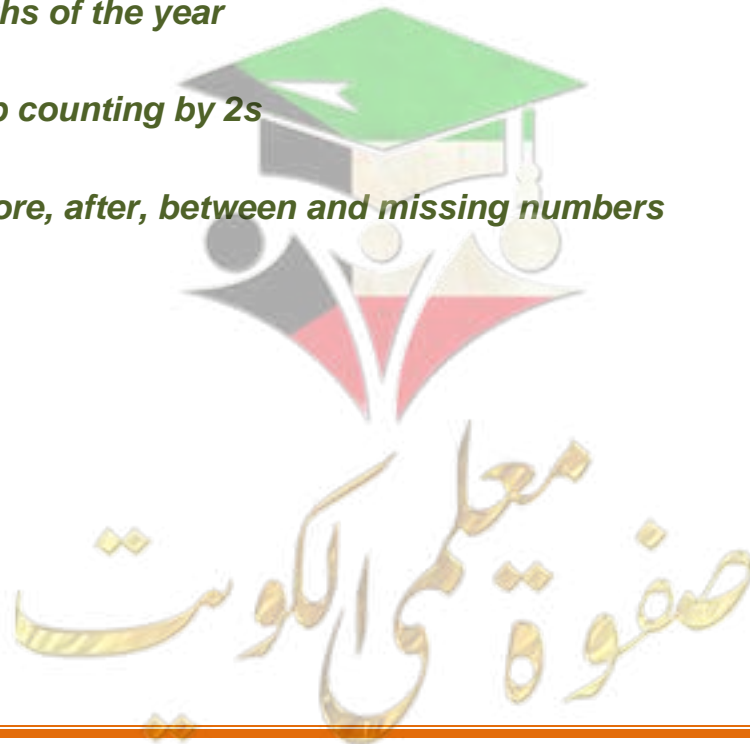
NAME: _____

CLASS: _____



TOPICS:-

- 1- *Counting (150 to 500)*
- 2- *Number names (.51 to 100)*
- 3- *Subtraction*
- 4- *Fraction*
- 5- *Position*
- 6- *Time*
- 7- *Descending order*
- 8- *Tables of 0,1,2*
- 9- *Months of the year*
- 10- *Skip counting by 2s*
- 11- *Before, after, between and missing numbers*



Q1. Fill in the missing numbers.

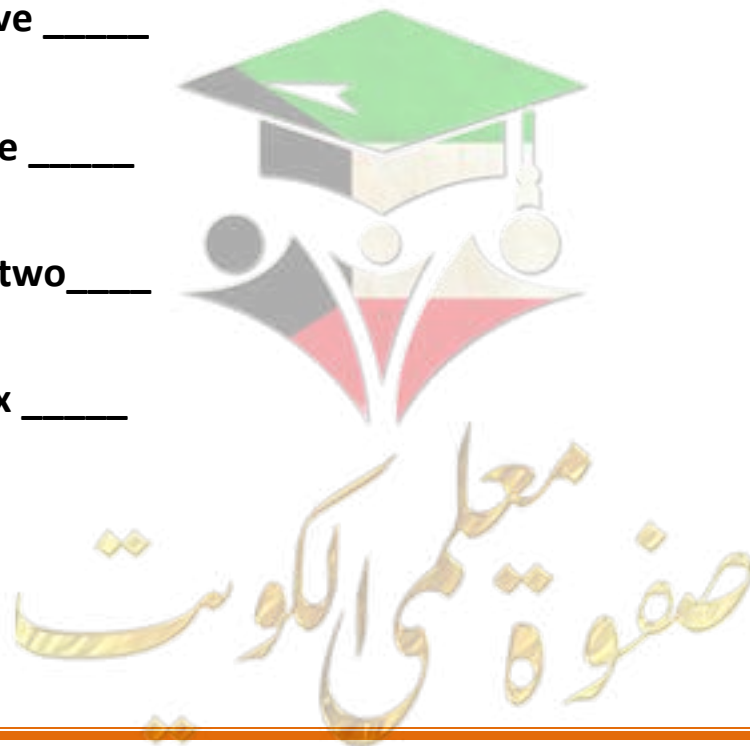
- a) 196, _____, _____, _____, 200
- b) 103, _____, _____, _____, 107
- c) 241, _____, _____, _____, 245
- d) 296, _____, _____, _____, 300
- e) 304, _____, _____, _____, 308
- f) 399, _____, _____, _____, 403
- g) 496, _____, _____, _____, 500

Q 2 a). Write the given numbers in words.

81 _____ 94 _____
59 _____ 100 _____

b) Write the numerals for the given number names.

- a) Eighty five _____
- b) Fifty one _____
- c) Seventy two _____
- d) Sixty six _____



Q3 a) What comes after 399?

399 _____

Q3 b) What comes before 445?

_____ 445

Q3 c) What comes in between 299 and 301?

299 _____ 301

Q4 a) Which month comes after April?

b) Which month comes before August?

c) How many months are there in a year?

d) Name two months start with letter S.

Q5. Find the difference.

Tens	Ones
5	4
- 2	1

Tens	Ones
6	8
- 4	0

Tens	Ones
7	2
- 4	1

Q6 a) Write the time.



What time is it?
It is _____ o'clock



What time is it?
It is _____ o'clock

b) Draw the hands on the clock.



4 o'clock

Q7. Arrange the numbers in descending order.

23 33 12 6 47

18 28 50 44 40

صفوة معلمي الكويت

Q8. Circle the correct answer.

1) $8 - 4 =$

a) 4

b) 8

2) $1 \times 10 =$ _____

a) 10

b) 0

3) $2 \times 4 =$ _____

a) 6

b) 8

4) $0 \times 7 =$ _____

a) 0

b) 7

4) $2 \times 9 =$ _____

a) 18

b) 16

5) Which number is bigger?

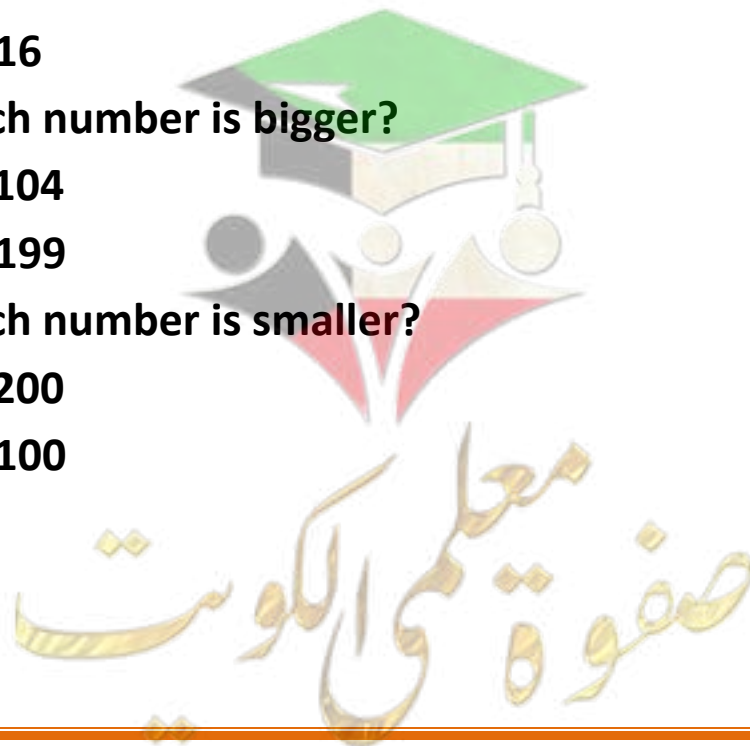
a) 104

b) 199

6) Which number is smaller?

a) 200

b) 100



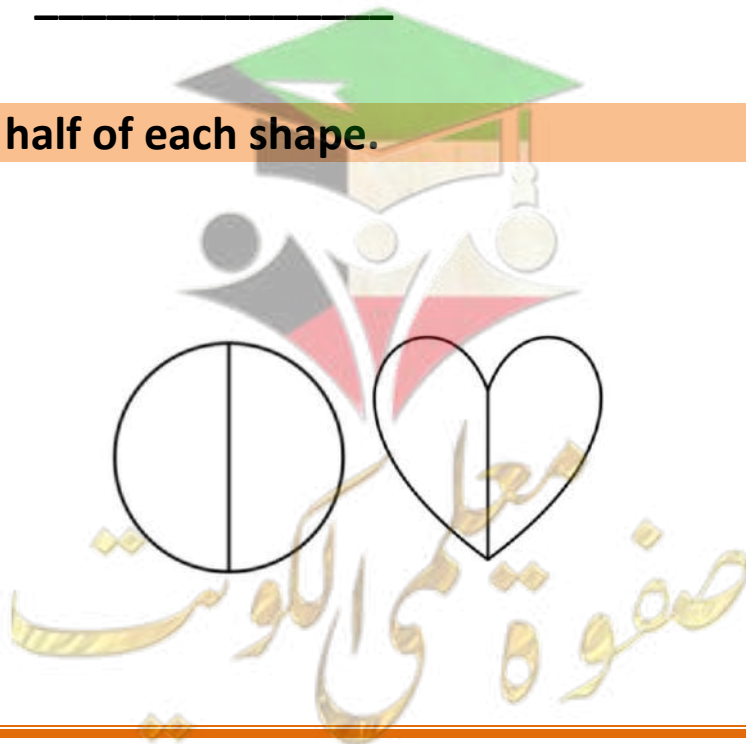
Q9. Fill in the blanks by skip counting in 2s.

18, _____, _____, _____, _____, 28

10) Write the ordinal numbers of the given numbers.

- a) 1 _____
- b) 2 _____
- c) 3 _____
- d) 4 _____
- e) 5 _____
- f) 6 _____
- g) 7 _____
- h) 8 _____
- i) 9 _____
- j) 10 _____

Q11) Colour half of each shape.

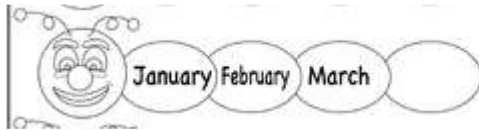


Q12) True or False.

- a) January is the first month of the year.(_____)
- b) Two halves make one whole.(_____)
- c) There are 10 months in a year. (_____)
- d) $5 - 3 = 1$ (_____)
- e) 99 comes before 100.(_____)
- f) $0 \times 8 = 8$ (_____)
- g) $2 \times 6 = 12$ (_____)
- h) October is the last month of the year.(_____)
- i) 187 comes after 186. (_____)

Q13) Fill in the blanks:

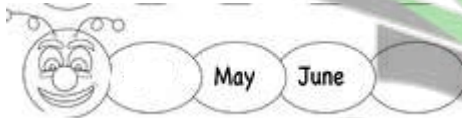
- a) Which month comes next



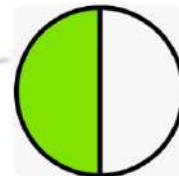
- b) What time is it ?.....



- c) Which month comes before May and after June?



- d) This fraction shows



BEST OF LUCK

صفوة من اللوت



صفوة معلمي الكويت